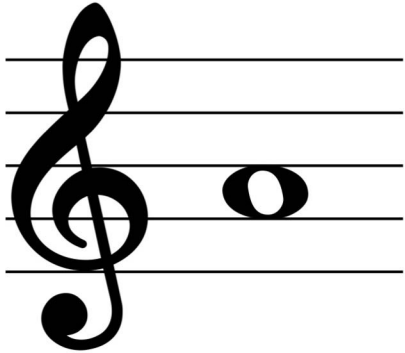



# GUIDED PITCH READING

## TREBLE CLEF

NAME: \_\_\_\_\_

**DIRECTIONS:** Follow the steps in the box to identify the pitches below.


<b>STEP 1: LOOK</b>	<b>STEP 2: QUESTION</b>	<b>STEP 3: SELECT</b>
	Is it a Line or a Space? →	<b>LINE</b> or <b>SPACE</b>
	Which # Line or Space? →	<b>1</b> <b>2</b> <b>3</b> <b>4</b> <b>5</b>
	Identify the Pitch. →	<b>A</b> <b>B</b> <b>C</b> <b>D</b> <b>E</b> <b>F</b> <b>G</b>

1. 

**LINE** or **SPACE**

**1 2 3 4 5**

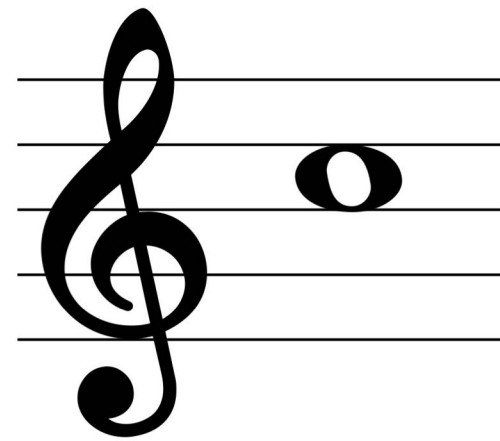
**A B C D E F G**

2. 

**LINE** or **SPACE**

**1 2 3 4 5**


**A B C D E F G**

3. 

**LINE** or **SPACE**

**1 2 3 4 5**


**A B C D E F G**

4. 

**LINE** or **SPACE**

**1 2 3 4 5**


**A B C D E F G**

5. 

**LINE** or **SPACE**

**1 2 3 4 5**


**A B C D E F G**


6. 


**LINE** or **SPACE**


**1 2 3 4 5**


**A B C D E F G**


7.   
**LINE or SPACE**  
1 2 3 4 5  
A B C D E F G

8.   
**LINE or SPACE**  
1 2 3 4 5  
A B C D E F G


9.   
**LINE or SPACE**  
1 2 3 4 5  
A B C D E F G


10.   
**LINE or SPACE**  
1 2 3 4 5  
A B C D E F G

11.   
**LINE or SPACE**  
1 2 3 4 5  
A B C D E F G

12.   
**LINE or SPACE**  
1 2 3 4 5  
A B C D E F G

13.   
**LINE or SPACE**  
1 2 3 4 5  
A B C D E F G

14.   
**LINE or SPACE**  
1 2 3 4 5  
A B C D E F G

15.   
**LINE or SPACE**  
1 2 3 4 5  
A B C D E F G

# IDENTIFYING PITCHES



NAME: \_\_\_\_\_

**DIRECTIONS:** Identify the pitch on each staff. Circle your answer underneath.

1.   
A B C D E F G

2.   
A B C D E F G

3.   
A B C D E F G

4.   
A B C D E F G

5.   
A B C D E F G

6.   
A B C D E F G

7.   
A B C D E F G

8.   
A B C D E F G


9.   
A B C D E F G

10.   
A B C D E F G

11.   
A B C D E F G

12.   
A B C D E F G

# TREBLE DRILLS



NAME: \_\_\_\_\_

**DIRECTIONS:** Identify the pitch on each staff. Write your answer in the box.

1.

2.

3.

4.

5.

6.

7.

8.

9.

10.



11.



12.



# REVERSE TREBLE DRILLS



NAME: \_\_\_\_\_



**DIRECTIONS:** Draw a note on each staff as indicated by the letter in the box.



1.  



2.  



3.  



4.  



5.  



6.  



7.  

8.  


9.  

10.  

11.  

12.  

# TREBLE PRACTICE




NAME: \_\_\_\_\_

**DIRECTIONS:** Identify each pitch. Write your answer in the boxes.

Four sets of treble clef musical staves for pitch identification. Each set consists of a staff with a treble clef, six notes, and six empty boxes below them for the answer.

							<input type="text"/>	<input type="text"/>	<input type="text"/>	<input type="text"/>	<input type="text"/>	<input type="text"/>
							<input type="text"/>	<input type="text"/>	<input type="text"/>	<input type="text"/>	<input type="text"/>	<input type="text"/>
							<input type="text"/>	<input type="text"/>	<input type="text"/>	<input type="text"/>	<input type="text"/>	<input type="text"/>
							<input type="text"/>	<input type="text"/>	<input type="text"/>	<input type="text"/>	<input type="text"/>	<input type="text"/>

# TREBLE PRACTICE



NAME: \_\_\_\_\_

**DIRECTIONS:** Identify each pitch. Write your answer in the boxes.


Musical staff 1: Treble clef, six whole notes on the lines (G4, A4, B4, C5, D5, E5). Below the staff are six empty boxes for answers.

Musical staff 2: Treble clef, six whole notes in the spaces (F4, G4, A4, B4, C5, D5). Below the staff are six empty boxes for answers.

Musical staff 3: Treble clef, six whole notes on the lines (G4, A4, B4, C5, D5, E5). Below the staff are six empty boxes for answers.

Musical staff 4: Treble clef, six whole notes in the spaces (F4, G4, A4, B4, C5, D5). Below the staff are six empty boxes for answers.

# TREBLE PRACTICE



NAME: \_\_\_\_\_

**DIRECTIONS:** Identify each pitch. Write your answer in the boxes.

Musical staff 1: Treble clef, key signature of one sharp (F#). Notes: G4 (first space), A4 (second space), B4 (third space), C5 (fourth space), D5 (first line), E5 (second space).  
Empty boxes for answers:


Musical staff 2: Treble clef, key signature of one sharp (F#). Notes: F#4 (first space), G4 (second space), A4 (third space), B4 (fourth space), C5 (first line), D5 (second space).  
Empty boxes for answers:

Musical staff 3: Treble clef, key signature of one sharp (F#). Notes: E4 (first space), F#4 (second space), G4 (third space), A4 (fourth space), B4 (first line), C5 (second space).  
Empty boxes for answers:

Musical staff 4: Treble clef, key signature of one sharp (F#). Notes: D4 (first space), E4 (second space), F#4 (third space), G4 (fourth space), A4 (first line), B4 (second space).  
Empty boxes for answers:



# TREBLE PRACTICE



NAME: \_\_\_\_\_

**DIRECTIONS:** Identify each pitch. Write your answer in the boxes.


Musical staff 1: Treble clef, six whole notes on the lines (G4, A4, B4, C5, D5, E5). Below each note is a square box for the answer.

Musical staff 2: Treble clef, six whole notes in the spaces (F4, G4, A4, B4, C5, D5). Below each note is a square box for the answer.

Musical staff 3: Treble clef, six whole notes on the lines (G4, A4, B4, C5, D5, E5). Below each note is a square box for the answer.

Musical staff 4: Treble clef, six whole notes in the spaces (F4, G4, A4, B4, C5, D5). Below each note is a square box for the answer.

# TREBLE PRACTICE



NAME: \_\_\_\_\_

**DIRECTIONS:** Identify each pitch. Write your answer in the boxes.

Musical staff 1: Treble clef, six whole notes on the lines (G4, A4, B4, C5, D5, E5). Below each note is a square box for the answer.

Musical staff 2: Treble clef, six whole notes on the lines (F4, G4, A4, B4, C5, D5). Below each note is a square box for the answer.

Musical staff 3: Treble clef, six whole notes on the lines (E4, F4, G4, A4, B4, C5). Below each note is a square box for the answer.

Musical staff 4: Treble clef, six whole notes on the lines (D4, E4, F4, G4, A4, B4). Below each note is a square box for the answer.